

# ECE 463/663 - Homework #13

LQG/LTR. Due Monday, April 29th  
Please submit as a hard copy, email to jacob.glower@ndsu.edu, or submit on BlackBoard

## LQG / LTR

For the cart and pendulum system of homework set #4:

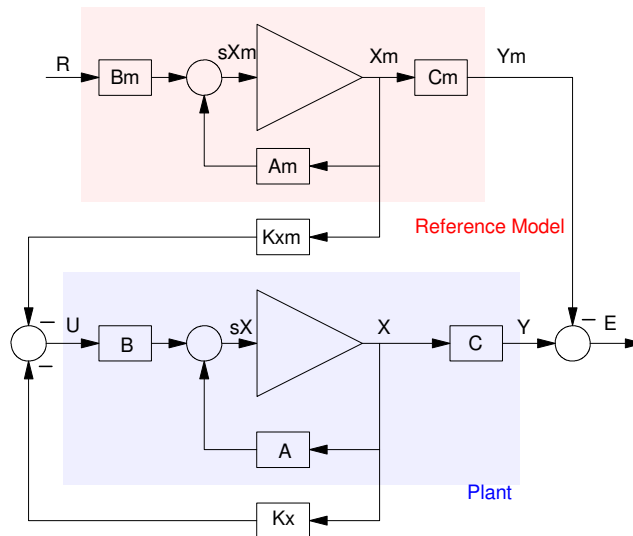
$$s \begin{bmatrix} x \\ \theta \\ \dot{x} \\ \dot{\theta} \end{bmatrix} = \begin{bmatrix} 0 & 0 & 1 & 0 \\ 0 & 0 & 0 & 1 \\ 0 & -2.45 & 0 & 0 \\ 0 & 9.42 & 0 & 0 \end{bmatrix} \begin{bmatrix} x \\ \theta \\ \dot{x} \\ \dot{\theta} \end{bmatrix} + \begin{bmatrix} 0 \\ 0 \\ 0.25 \\ -0.1923 \end{bmatrix} F$$

Design a control law so that the cart and pendulum system behaves like the following reference model:

$$y_m = \left( \frac{1}{s^2 + s + 1} \right) R$$

## LQG/LTR without a Servo Compensator:

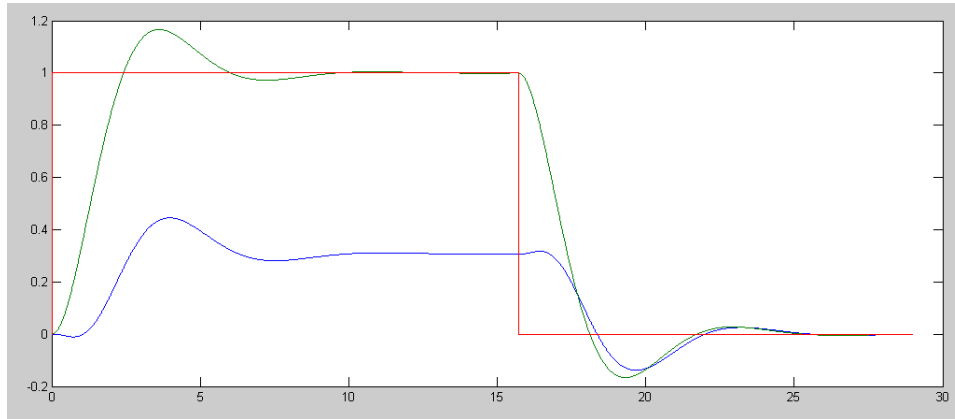
1) Give a block diagram for your controller



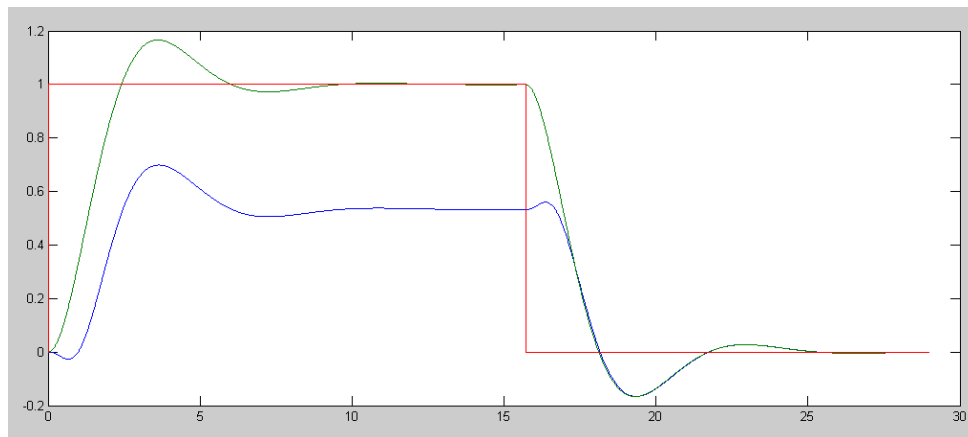
$$s \begin{bmatrix} X \\ X_m \end{bmatrix} = \begin{bmatrix} A & 0 \\ 0 & A_m \end{bmatrix} \begin{bmatrix} X \\ X_m \end{bmatrix} + \begin{bmatrix} B \\ 0 \end{bmatrix} U + \begin{bmatrix} 0 \\ B_m \end{bmatrix} R$$

$$E = \begin{bmatrix} C & -C_m \end{bmatrix} \begin{bmatrix} X \\ X_m \end{bmatrix}$$

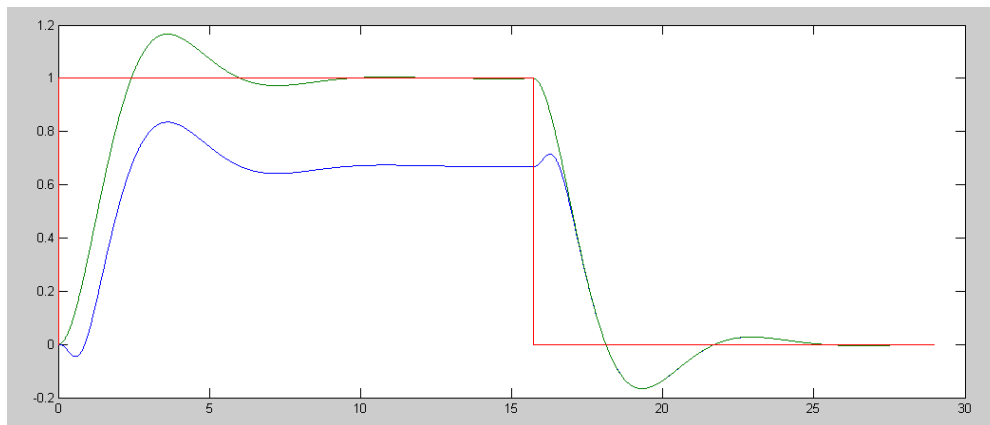
2) (20pt) Plot the step response of the model and the linearized plant for your control law for  $Q = 100 e^2$



$Q = 1,000 e^2$



$Q = 10,000 e^2$



## Code

```
A = [0,0,1,0;0,0,0,1;0,-2.45,0,0;0,9.42,0,0];
B = [0;0;0.25;-0.1923];
C = [1,0,0,0];

Ref = 1;
dt = 0.01;
t = 0;

%Reference Model
Am = [0,1;-1,-1];
Bm = [0;1];
Cm = [1,0];
[n,m] = size(Am);

A6 = [ A, zeros(4,n) ;
       zeros(n,4), Am];
B6 = [B; zeros(n,1)];
B6r = [zeros(4,1); Bm];

C6 = [C, -Cm];
Q = C6' * C6;
R = 1;

K6 = lqr(A6, B6, Q*1e3, 1);

Kx = K6(1:4);
Km = K6(5:4+n);

X = zeros(4,1);
Xm = zeros(n,1);

n = 0;
y = [];
while(t < 29)
    Ref = 1*(sin(0.2*t) > 0);
    U = -Km*Xm - Kx*X;

    dX = CartDynamics(X, U);
    dXm = Am*Xm + Bm*Ref;

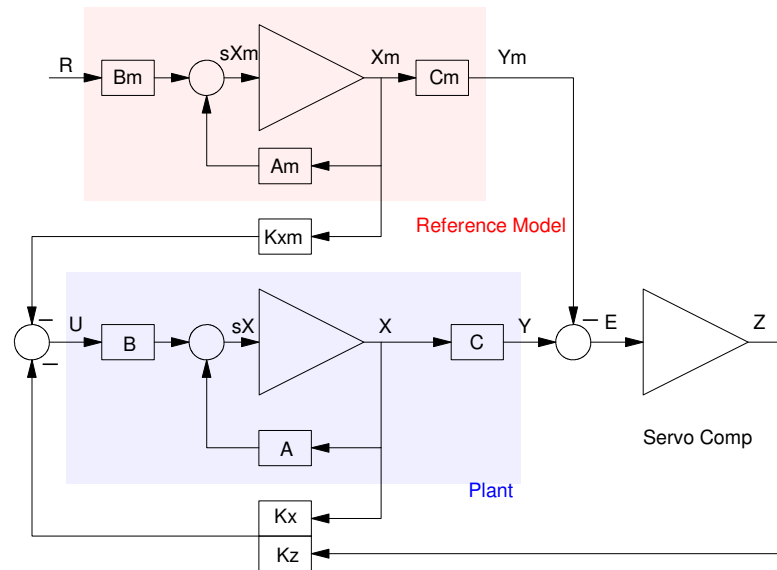
    X = X + dX * dt;
    Xm = Xm + dXm * dt;

    t = t + dt;
    n = mod(n+1, 5);
    if(n == 0)
        CartDisplay(X, [Cm*Xm;0;0;0], Ref);
    end
    y = [y ; X(1), Cm*Xm, Ref];
end

hold off;
t = [1:length(y)]' * dt;
plot(t,y);
```

### LQG/LTR with a Servo Compensator:

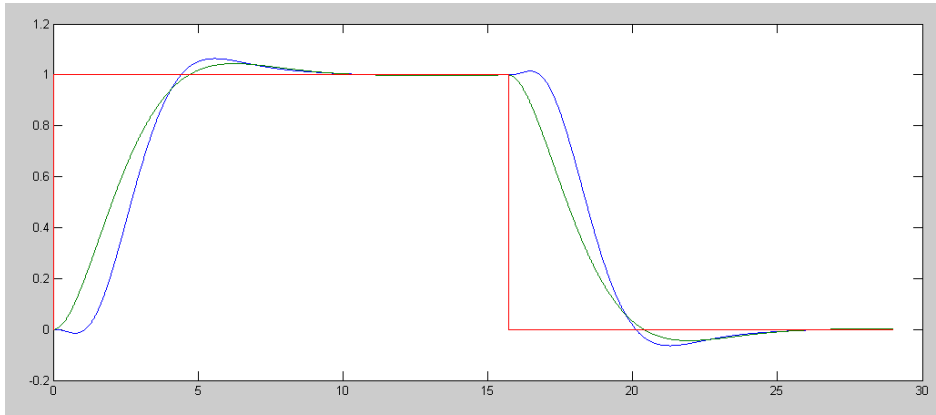
3) Give a block diagram for your controller plus servo compensator



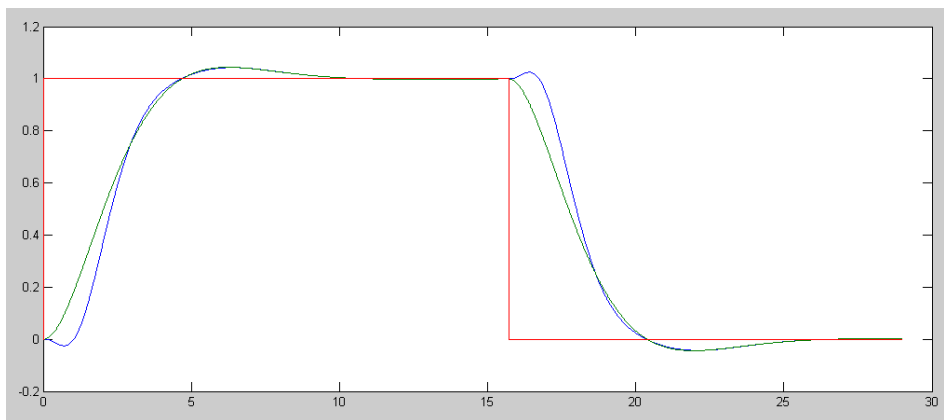
$$s \begin{bmatrix} X \\ Z \\ X_m \end{bmatrix} = \begin{bmatrix} A & 0 & 0 \\ C & 0 & -C_m \\ 0 & 0 & A_m \end{bmatrix} \begin{bmatrix} X \\ Z \\ X_m \end{bmatrix} + \begin{bmatrix} B \\ 0 \\ 0 \end{bmatrix} U + \begin{bmatrix} 0 \\ 0 \\ B_m \end{bmatrix} R$$

$$U = \begin{bmatrix} -K_x & -K_z & -K_m \end{bmatrix} \begin{bmatrix} X \\ Z \\ X_m \end{bmatrix}$$

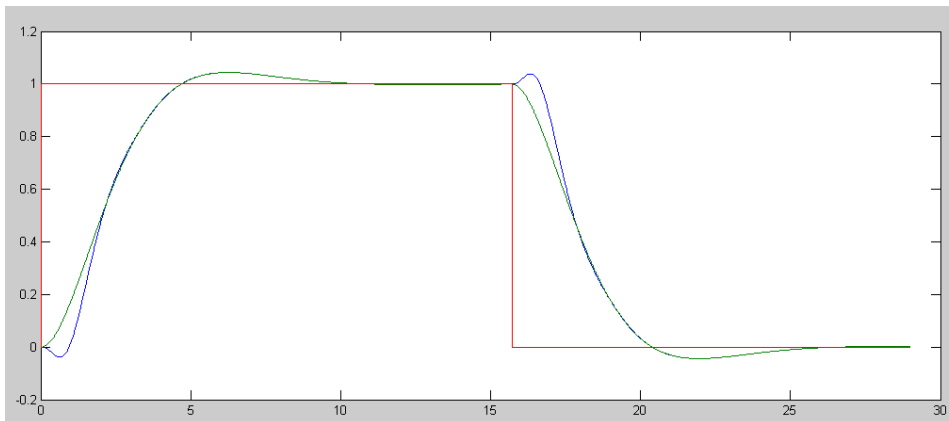
4) (20pt) Plot the step response of the model and the linearized plant for your control law for  $Q = 100 z^2$



$Q = 1,000 z^2$



$Q = 10,000 z^2$



## Code:

```
A = [0,0,1,0;0,0,0,1;0,-2.45,0,0;0,9.42,0,0];
B = [0;0;0.25;-0.1923];
C = [1,0,0,0];

Ref = 1;
dt = 0.01;
t = 0;

%Reference Model
Am = [0,1;-0.5,-1];
Bm = [0;1];
Cm = [0.5,0];
[n,m] = size(Am);

A7 = [ A, zeros(4,1), zeros(4,n) ;
      C, 0, -Cm;
      zeros(n,4), zeros(n,1), Am];
B7 = [B; 0; zeros(n,1)];
B7r = [zeros(4,1); 0; Bm];

C7 = [0*C, 1, 0*Cm];

Q = C7' * C7;
R = 1;

K7 = lqr(A7, B7, Q*1e4, 1);

Kx = K7(1:4);
Kz = K7(5);
Km = K7(6:5+n);

X = zeros(4,1);
Xm = zeros(n,1);

Z = 0;

n = 0;
y = [];
while(t < 29)
    Ref = 1*(sin(0.2*t) > 0);
    U = -Km*Xm - Kx*X - Kz*Z;

    dX = CartDynamics(X, U);
    dXm = Am*Xm + Bm*Ref;
    dZ = X(1) - Cm*Xm;

    X = X + dX * dt;
    Xm = Xm + dXm * dt;
    Z = Z + dZ*dt;

    t = t + dt;
    n = mod(n+1, 5);
    if(n == 0)
        CartDisplay(X, [Cm*Xm;0;0;0], Ref);
    end
    y = [y ; X(1), Cm*Xm, Ref];
end

hold off;
t = [1:length(y)]' * dt;
plot(t,y);
```

